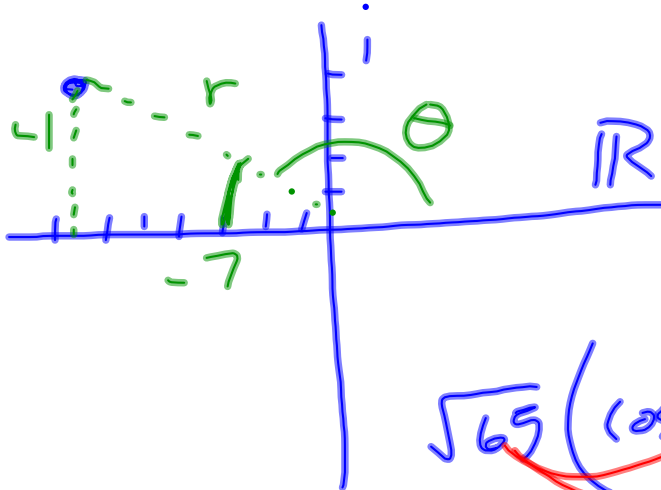


p. 496)  $Z = r(\cos \theta + i \sin \theta)$

25

$-7 + 4i$

$r = \sqrt{65}$



$\tan \theta = \frac{4}{-7}$

$\theta = -29.7^\circ$

$\theta \approx 150.3^\circ$

$$\sqrt{65} (\cos 150.3^\circ + i \sin 150.3^\circ)$$

26

### 6-5 Multiplying and Dividing Complex Numbers

$z_1 = 3 + 2i$

$z_2 = -5 + 7i$

$$(3 + 2i)(-5 + 7i)$$

$$\begin{array}{l} (3 + 2i) \quad (-5 - 7i) \\ \hline (-5 + 7i) \quad (-5 - 7i) \end{array}$$

$$z_1 = r_1(\cos \theta_1 + i \sin \theta_1)$$

$$z_2 = r_2(\cos \theta_2 + i \sin \theta_2)$$

$$z_1 z_2 = r_1 r_2 [\cos(\theta_1 + \theta_2) + i \sin(\theta_1 + \theta_2)]$$

$$\frac{z_1}{z_2} = \frac{r_1}{r_2} [\cos(\theta_1 - \theta_2) + i \sin(\theta_1 - \theta_2)]$$

Ex 1  $z_1 = 2\left(\cos \frac{2\pi}{3} + i \sin \frac{2\pi}{3}\right)$

$$z_2 = 8\left(\cos \frac{11\pi}{6} + i \sin \frac{11\pi}{6}\right)$$

Find  $z_1 z_2$  Write the answer in trigonometric and standard form.

$$z_1 z_2 = 16 \left( \cos \frac{5\pi}{2} + i \sin \frac{5\pi}{2} \right)$$

$$16 \left( \cos \frac{\pi}{2} + i \sin \frac{\pi}{2} \right)$$

$$16i$$

Ex 2  $z_1 = 24(\cos 300^\circ + i \sin 300^\circ)$

$z_2 = 8(\cos 75^\circ + i \sin 75^\circ)$

Find  $\frac{z_1}{z_2}$  Write the answer in trigonometric and standard form.

$$\frac{z_1}{z_2} = 3 (\cos 225^\circ + i \sin 225^\circ)$$

$$-2.1 + -2.1i$$

Ex 3 Find  $z^2$

$$z = r(\cos \theta + i \sin \theta) \cdot r(\cos \theta + i \sin \theta)$$

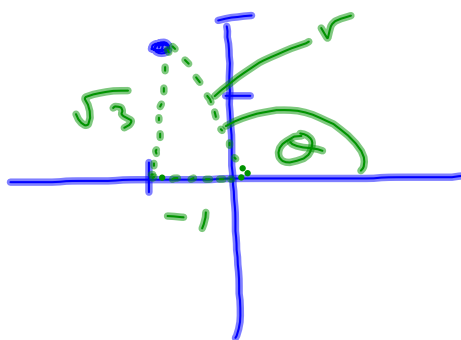
$$z^2 = r^2 (\cos 2\theta + i \sin 2\theta)$$

DeMoivre's Theorem -

$$\text{If } z = r(\cos \theta + i \sin \theta)$$

$$\text{Then } z^n = r^n (\cos n\theta + i \sin n\theta)$$

Ex 4 Find  $(-1 + \sqrt{3}i)^{12}$

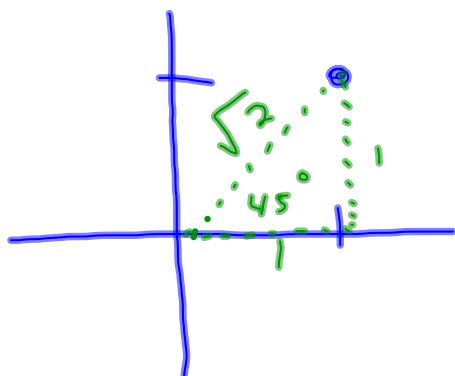


$$2(\cos 120^\circ + i \sin 120^\circ)$$

$$2^{12}(\cos 1440^\circ + i \sin 1440^\circ)$$

4096

Ex 5 Find  $(1 + i)^8$



$$\sqrt{2}^8 (\cos 45^\circ + i \sin 45^\circ)$$

$$16 (\cos 360^\circ + i \sin 360^\circ)$$

$$16$$

Homework  
p.457  
#55-65, 91-93 odds