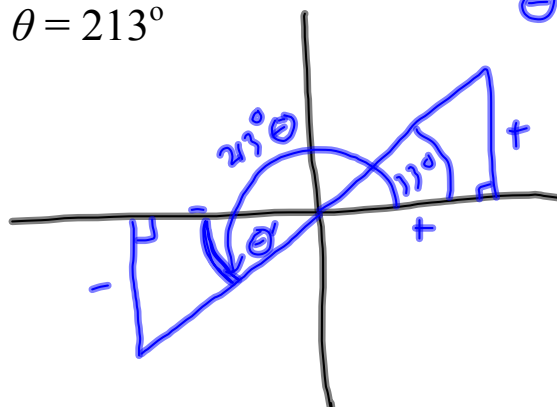


## 4-4 Trigonometric Functions (continued)

Ex 1 Find the reference angle  $\theta'$  for the angle  $\theta$ . Then sketch  $\theta$  and  $\theta'$  in standard position.

$$\theta = 213^\circ$$

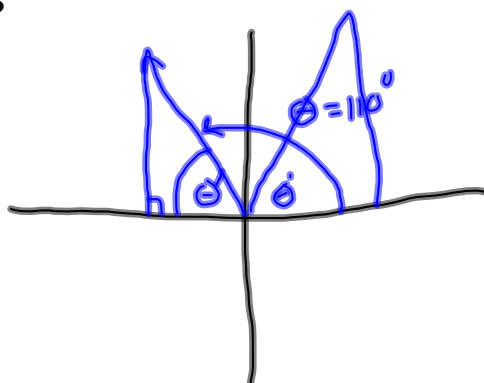
$$\theta' = 33^\circ$$



Ex 2 Find the reference angle  $\theta'$  for the angle  $\theta$ . Then sketch  $\theta$  and  $\theta'$  in standard position.

$$\theta = 110^\circ$$

$$\theta' = 70^\circ$$



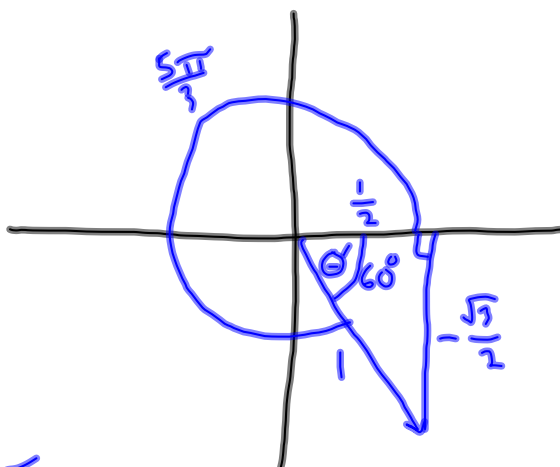
Ex 3 Evaluate the sine, cosine, and tangent of the angle without a calculator.

$$\frac{5\pi}{3}$$

$$(y) \sin \theta = -\frac{\sqrt{3}}{2}$$

$$(x) \cos \theta = \frac{1}{2}$$

$$\left(\frac{y}{x}\right) \tan \theta = \frac{-\frac{\sqrt{3}}{2}}{\frac{1}{2}} = -\frac{\sqrt{3}}{1} = -\sqrt{3}$$



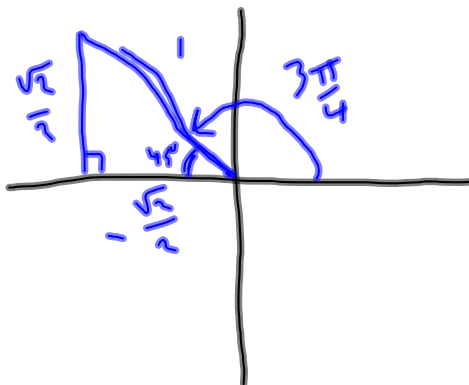
Ex 4 Evaluate the sine, cosine, and tangent of the angle without a calculator.

$$\frac{3\pi}{4}$$

$$\sin \theta = \frac{\sqrt{2}}{2}$$

$$\cos \theta = -\frac{\sqrt{2}}{2}$$

$$\tan \theta = -1$$

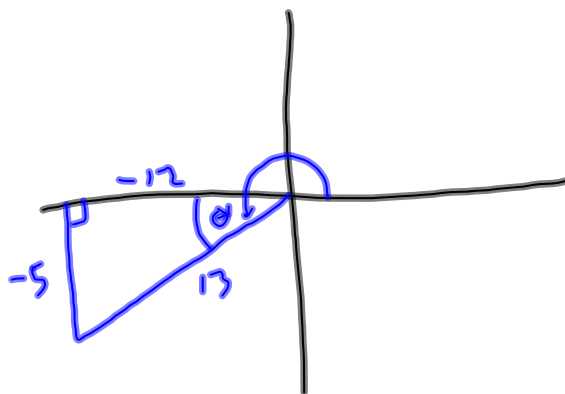


Ex 5 Find the indicated trigonometric value in the specified quadrant.

$$\sin \theta = -\frac{5}{13}$$

Quadrant III

$$\tan \theta = \frac{-5}{-12} = \frac{5}{12}$$

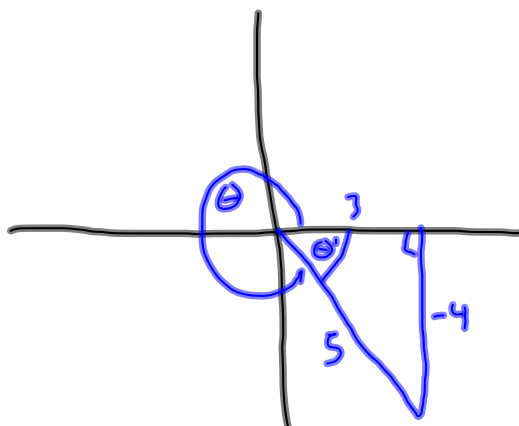


Ex 6 Find the indicated trigonometric value in the specified quadrant.

$$\tan \theta = -\frac{4}{3}$$

Quadrant IV

$$\sin \theta = -\frac{4}{5}$$

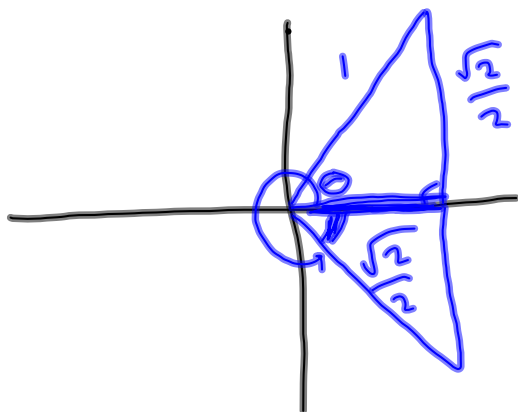


Ex 7 Find two solutions of the equation. Give your answers in degrees and radians.

$$\cos \theta = \frac{\sqrt{2}}{2}$$

$$\theta = 45^\circ, 315^\circ$$

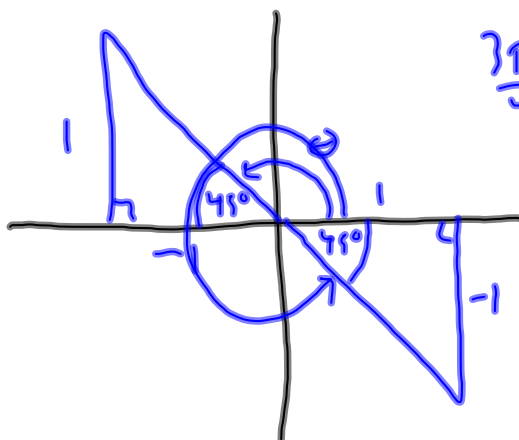
$$\frac{\pi}{4}, \frac{7\pi}{4}$$



Ex 8 Find two solutions of the equation. Give your answers in degrees and radians.

$$\tan \theta = -1$$

$$\frac{-1}{-1}$$



$$\theta = 135^\circ, 315^\circ$$
$$\frac{3\pi}{4}, \frac{7\pi}{4}$$

Homework  
p.294  
#45-69, 77-93  
odds

